

# Brick Addition 1+




Teachers/Parents: Print this off and get students to do the worksheet. OR get out the real bricks and do the activity with them. Students are adding the dots/studs on the brick

$1 + 0 = \underline{\quad}$




$1 + 7 = \underline{\quad}$



$1 + 1 = \underline{\quad}$




$1 + 8 = \underline{\quad}$




$1 + 2 = \underline{\quad}$



$1 + 9 = \underline{\quad}$



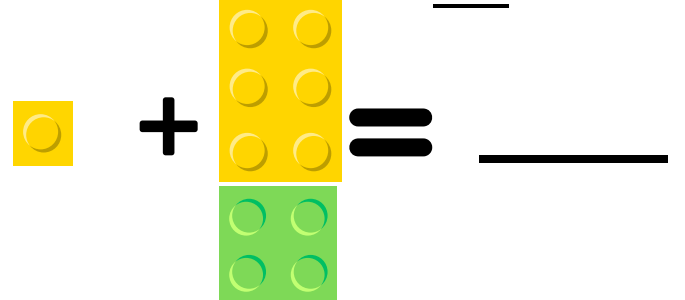
$1 + 3 = \underline{\quad}$




$1 + 4 = \underline{\quad}$



$1 + 10 = \underline{\quad}$



$1 + 5 = \underline{\quad}$



$0 + 1 = \underline{\quad}$

$6 + 1 = \underline{\quad}$

$1 + 1 = \underline{\quad}$

$7 + 1 = \underline{\quad}$

$2 + 1 = \underline{\quad}$

$8 + 1 = \underline{\quad}$


$3 + 1 = \underline{\quad}$

$9 + 1 = \underline{\quad}$

$4 + 1 = \underline{\quad}$

$10 + 1 = \underline{\quad}$

$1 + 6 = \underline{\quad}$



$5 + 1 = \underline{\quad}$