



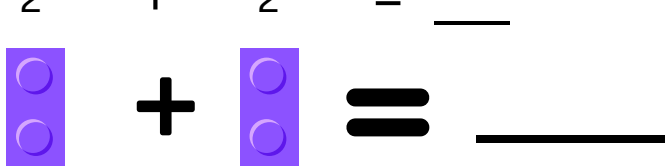
# Brick Addition 2+

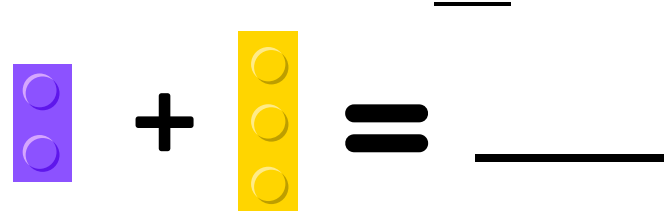



Teachers/Parents: Print this off and get students to do the worksheet. OR get out the real bricks and do the activity with them. **Students are adding the dots/studs on the brick**

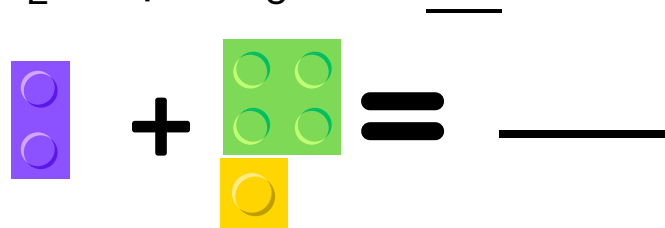
$$2 + 0 = \underline{\quad}$$



$$2 + 1 = \underline{\quad}$$


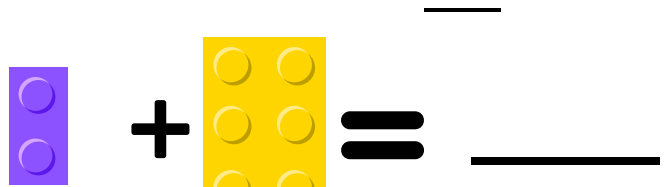
$$2 + 2 = \underline{\quad}$$


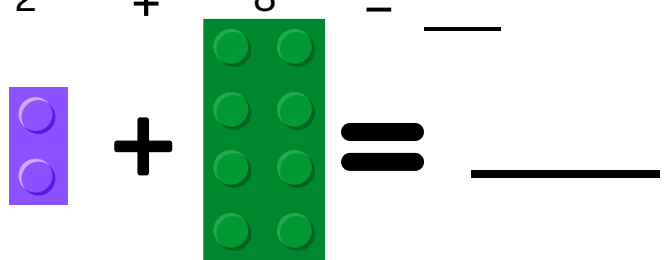
$$2 + 3 = \underline{\quad}$$


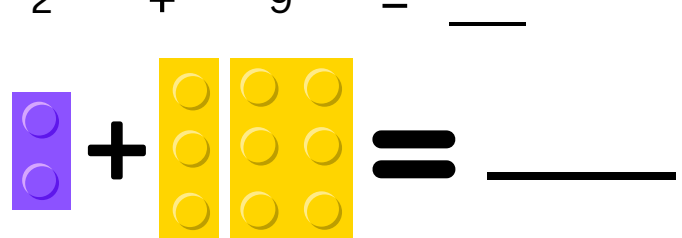
$$2 + 4 = \underline{\quad}$$


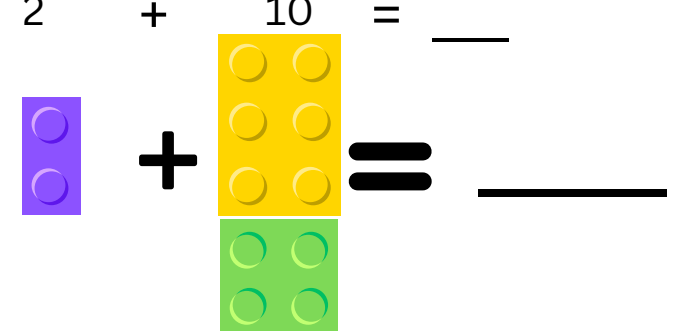
$$2 + 5 = \underline{\quad}$$


$$2 + 6 = \underline{\quad}$$


$$2 + 7 = \underline{\quad}$$


$$2 + 8 = \underline{\quad}$$


$$2 + 9 = \underline{\quad}$$


$$2 + 10 = \underline{\quad}$$


$$0 + 2 = \underline{\quad} \quad 6 + 2 = \underline{\quad}$$

$$1 + 2 = \underline{\quad} \quad 7 + 2 = \underline{\quad}$$

$$2 + 2 = \underline{\quad} \quad 8 + 2 = \underline{\quad}$$

$$3 + 2 = \underline{\quad} \quad 9 + 2 = \underline{\quad}$$

$$4 + 2 = \underline{\quad} \quad 10 + 2 = \underline{\quad}$$

$$5 + 2 = \underline{\quad}$$