




Brick Addition 3+

Teachers/Parents: Print this off and get students to do the worksheet. OR get out the real bricks and do the activity with them. **Students are adding the dots/studs on the brick**





$$3 + 0 = \underline{\quad}$$

 +  =  = 





$$3 + 1 = \underline{\quad}$$

 +  =  = 





$$3 + 2 = \underline{\quad}$$

 +  =  = 






$$3 + 3 = \underline{\quad}$$

 +  =  = 





$$3 + 4 = \underline{\quad}$$

 +  =  = 





$$3 + 5 = \underline{\quad}$$

 +  +  =  = 





$$3 + 6 = \underline{\quad}$$

 +  =  = 





$$3 + 7 = \underline{\quad}$$

 +  =  = 





$$3 + 8 = \underline{\quad}$$

 +  =  = 

$$3 + 9 = \underline{\quad}$$

 +  =  = 

$$3 + 10 = \underline{\quad}$$

 +  =  = 

$$0 + 3 = \underline{\quad}$$

$$6 + 3 = \underline{\quad}$$

$$1 + 3 = \underline{\quad}$$

$$7 + 3 = \underline{\quad}$$

$$2 + 3 = \underline{\quad}$$

$$8 + 3 = \underline{\quad}$$

$$3 + 3 = \underline{\quad}$$

$$9 + 3 = \underline{\quad}$$

$$4 + 3 = \underline{\quad}$$

$$10 + 3 = \underline{\quad}$$

$$5 + 3 = \underline{\quad}$$