










Brick Addition Random









Teachers/Parents: Print this off and get students to do the worksheet. OR get out the real bricks and do the activity with them. **Students are adding the dots/studs on the brick**




$$8 + 3 = \underline{\quad}$$

 $+$

 $=$





$$3 + 3 = \underline{\quad}$$

 $+$

 $=$





$$6 + 2 = \underline{\quad}$$

 $+$

 $=$





$$3 + 2 = \underline{\quad}$$

 $+$

 $=$





$$4 + 8 = \underline{\quad}$$

 $+$

 $=$





$$4 + 4 = \underline{\quad}$$

 $+$

 $=$




$$8 + 8 = \underline{\quad}$$

 $+$

 $=$


$$8 + 2 = \underline{\quad}$$

 $+$

 $=$


$$1 + 2 = \underline{\quad}$$

 $+$

 $=$


$$4 + 1 = \underline{\quad}$$

 $+$

 $=$


$$4 + 2 = \underline{\quad}$$

 $+$

 $=$


$$6 + 1 = \underline{\quad}$$

 $+$

 $=$
