



Brick Addition 6+





Teachers/Parents: Print this off and get students to do the worksheet. OR get out the real bricks and do the activity with them. **Students are adding the dots/studs on the brick**


$$6 + 0 = \underline{\quad}$$



$$+ \quad = \underline{\quad}$$


$$6 + 7 = \underline{\quad}$$



$$+ \quad = \underline{\quad}$$



$$6 + 1 = \underline{\quad}$$



$$+ \quad = \underline{\quad}$$



$$6 + 8 = \underline{\quad}$$



$$+ \quad = \underline{\quad}$$



$$6 + 2 = \underline{\quad}$$



$$+ \quad = \underline{\quad}$$



$$6 + 3 = \underline{\quad}$$



$$+ \quad = \underline{\quad}$$



$$6 + 9 = \underline{\quad}$$



$$+ \quad = \underline{\quad}$$



$$6 + 4 = \underline{\quad}$$


$$+ \quad = \underline{\quad}$$


$$6 + 10 = \underline{\quad}$$


$$+ \quad = \underline{\quad}$$


$$6 + 5 = \underline{\quad}$$


$$+ \quad = \underline{\quad}$$


$$0 + 6 = \underline{\quad}$$

$$6 + 6 = \underline{\quad}$$

$$1 + 6 = \underline{\quad}$$

$$7 + 6 = \underline{\quad}$$

$$2 + 6 = \underline{\quad}$$

$$8 + 6 = \underline{\quad}$$


$$3 + 6 = \underline{\quad}$$

$$9 + 6 = \underline{\quad}$$

$$4 + 6 = \underline{\quad}$$

$$10 + 6 = \underline{\quad}$$

$$5 + 6 = \underline{\quad}$$

$$6 + 6 = \underline{\quad}$$


$$+ \quad = \underline{\quad}$$
